

Name _____

Slippery Slope

Directions: Plot the points on the table below. Label each point.

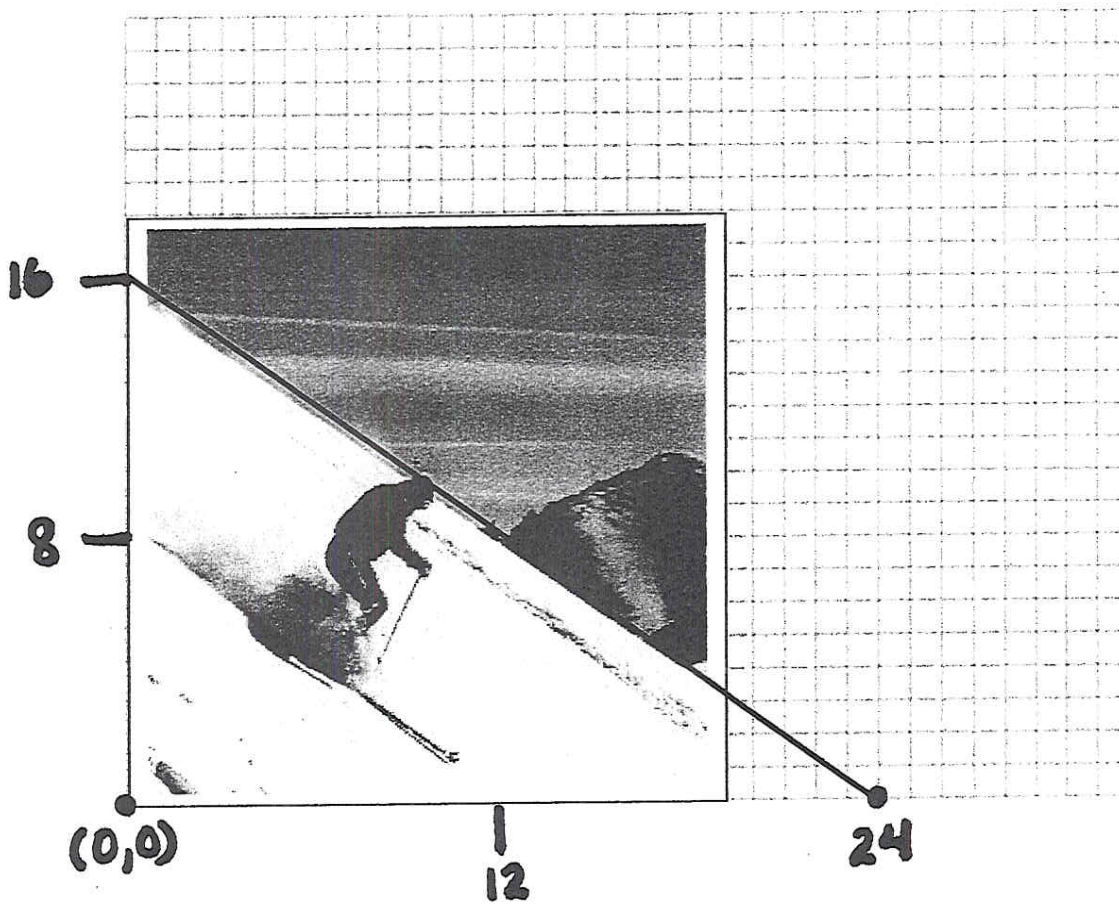
1. Ski Slope

X	y	Point
0	16	A
3	14	B
12	8	C
24	0	D

A. What is the slope between points A and B?

B. What is the slope between points B and C?

C. What is the slope between points A and D?



Slippery Slope

Directions: Plot the points on the table below. Label each point.

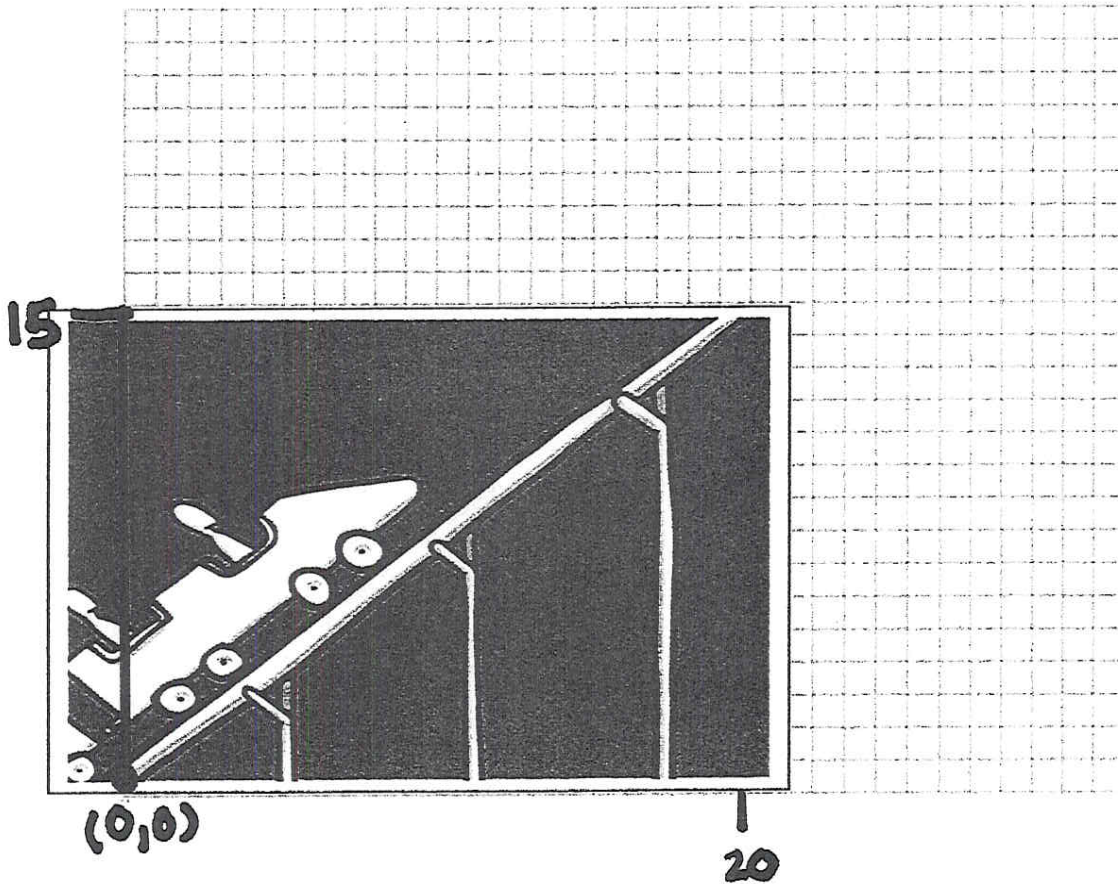
2. Rollercoaster

X	y	Point
0	0	A
4	3	B
16	12	C
20	15	D

D. What is the slope between points A and C?

E. What is the slope between points B and D?

F. What is the slope between points A and D?



Slippery Slope

Directions: Plot the points on the table below. Label each point.

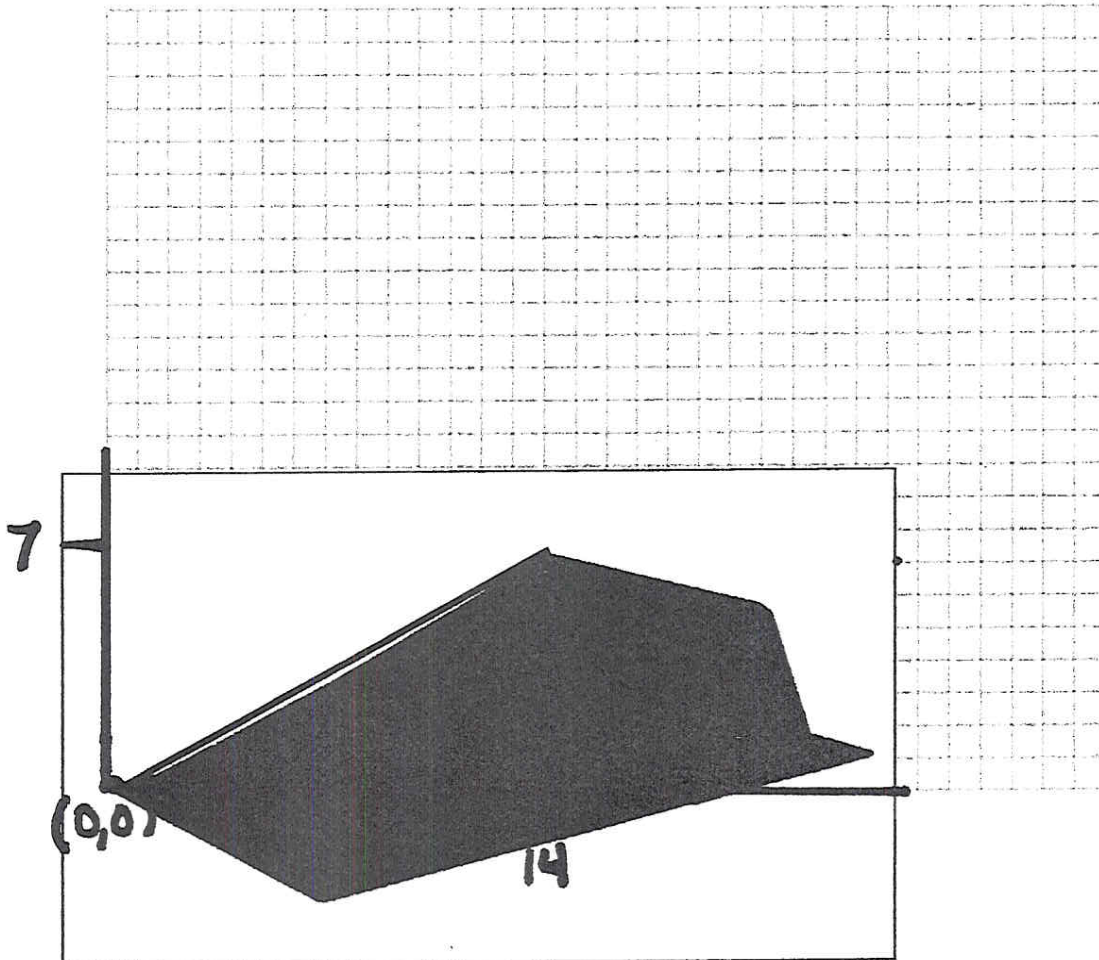
3. Skateboard Ramp

X	y	Point
0	0	A
6	3	B
10	5	C
14	7	D

G. What is the slope between points A and C?

H. What is the slope between points B and D?

I. What is the slope between points A and D?



Name _____

Slippery Slope

Directions: Plot the points on the table below. Label each point.

4. Slide

X	y	Point
0	9	A
3	6	B
6	3	C
9	0	D

- J. What is the slope between points A and C?

- K. What is the slope between points B and D?

- L. What is the slope between points A and D?

